



# Reading Rulers (cm & mm)

Grade 3

Name: \_\_\_\_\_

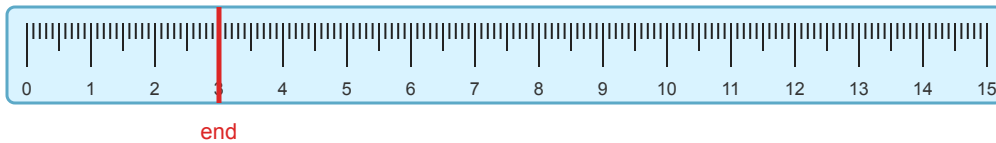
Read each ruler and write the length in centimeters.

1 cm = 10 mm. Read the large numbers for cm and small marks for mm.

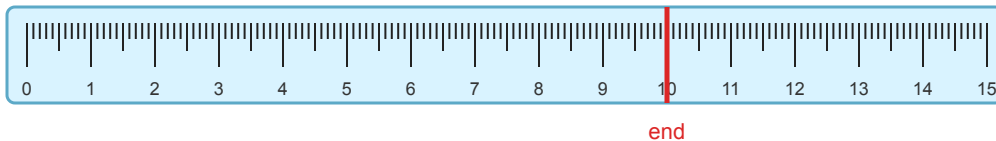
**Example:** Length = 5.2 cm

**ruler-metric**

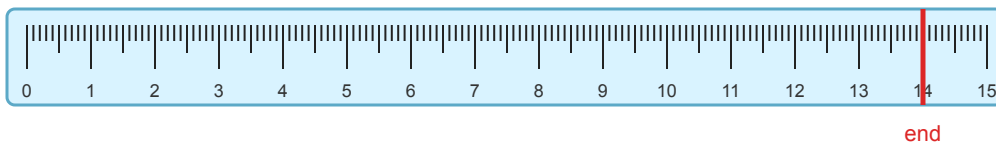
(1) Read the ruler. What is the length?



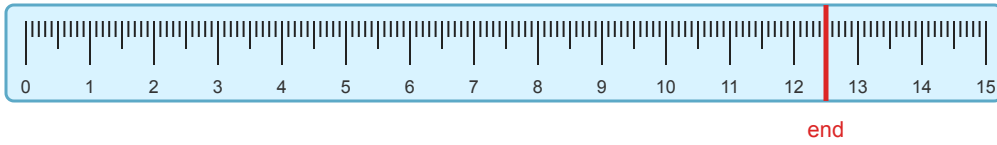
(2) What length is shown on the ruler?



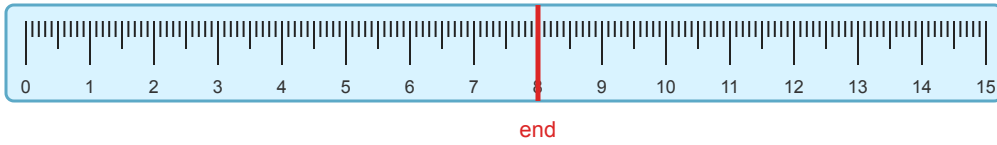
(3) Read the ruler. What is the length?



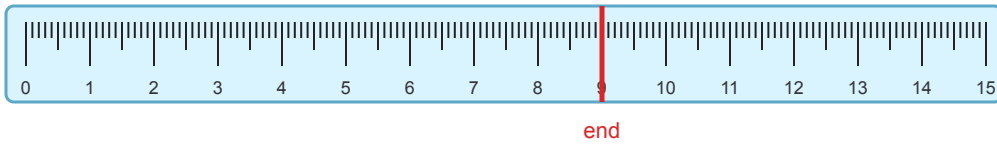
(4) What length is shown on the ruler?



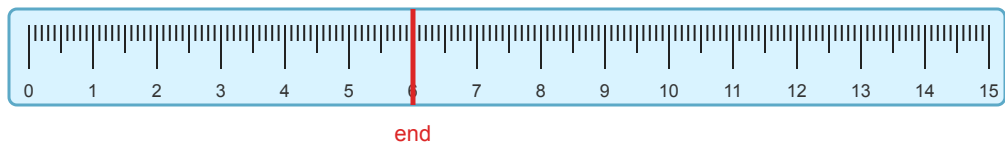
(5) Read the ruler. What is the length?



(6) What length is shown on the ruler?



(7) Read the ruler. What is the length?



---

(8) What length is shown on the ruler?

