




Receipts & Mini-Budgets (Money Addition) - Set A

Grade 3


Name: _____

Add item costs; compute remaining or needed funds.


Example: $12.50+7.25+3.75=23.50$

- (1) Sarah bought a toy for \$4.20 and a sticker pack for \$1.25. How much did she spend in total? Answer: _____ 



- (2) Tom saved \$3.40 from his allowance and earned \$2.40 more by helping his neighbor. How much money does Tom have now? Answer: _____ 



- (3) A book costs \$4.50 and a bookmark costs \$3.25. What is the combined cost? Answer: _____ 



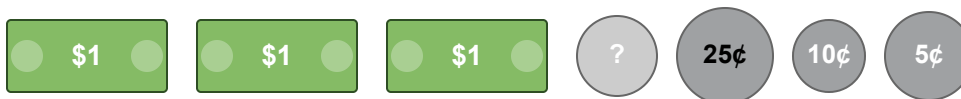
(4) Maria bought an apple for \$1.40, a banana for \$2.40, and a small juice for \$0.45. How much did she spend altogether? Answer: _____ 🍏



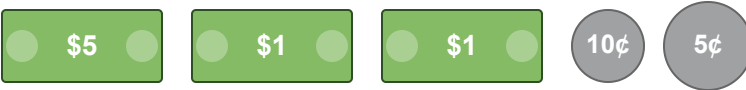
(5) Dad bought a newspaper for \$5.40 and a coffee for \$3.40. What was his total bill? Answer: _____ ☕



(6) A toy car costs \$2.45 and a small plane costs \$1.45. What is the total cost of both toys? Answer: _____ 🚗




(7) Lily spent \$4.75 on art supplies and \$2.40 on a new brush. How much did she spend in all? Answer: _____ 🎨




(8) A pack of gum is \$1.40, a candy bar is \$0.40, and a lollipop is \$0.40. What is the total cost? Answer: _____ 🍬




(9) A large pizza costs \$6.40 and a drink costs \$3.40. How much is the total order? Answer: _____ 🍕




(10) A comic book costs \$4.50 and a poster costs \$3.45. How much is the total purchase? Answer: _____ 

\$5 \$1 \$1 ? 25¢ 10¢ 10¢

(11) John bought a pen for \$2.40, a notepad for \$1.40, an eraser for \$0.40, and a sharpener for \$0.40. What is the total cost? Answer: _____ 

\$1 \$1 \$1 \$1 ? 10¢

(12) Mom bought groceries: milk for \$4.75, bread for \$3.45, and eggs for \$1.20. What was her total grocery bill? Answer: _____ 

\$5 \$1 \$1 \$1 \$1 25¢ 10¢ 5¢

