



Rectangle Area and Perimeter

Grade 3

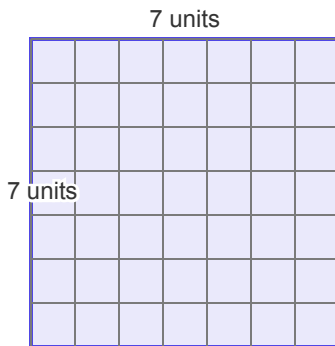
Name: _____

Find Area (A) and Perimeter (P).


Area = $l \times w$. Perimeter = $2l + 2w$.

Example: A = 12, P = 14

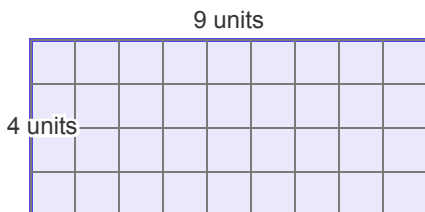
(1) Find the perimeter of this rectangle.



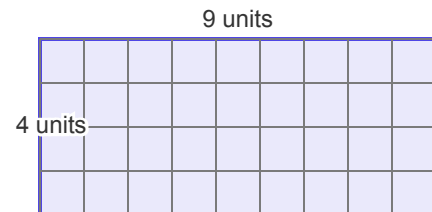
(2) Find the area of this rectangle.



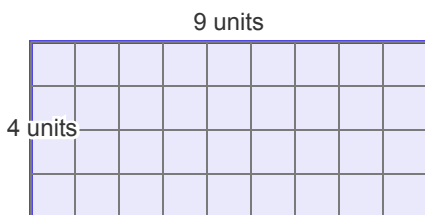
(3) Find the perimeter of this rectangle.



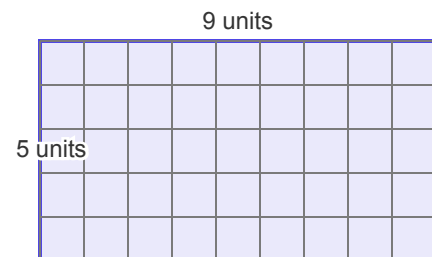
(4) Find the area of this rectangle.



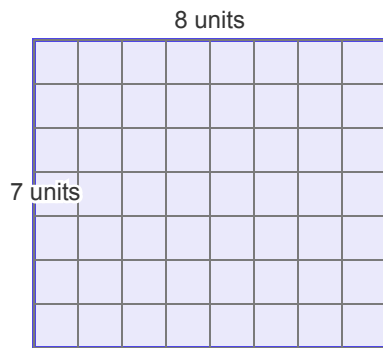
(5) Find the perimeter of this rectangle.



(6) Find the area of this rectangle.



(7) Find the perimeter of this rectangle.



(8) Find the area of this rectangle.

