





\$5 Bills and Coins

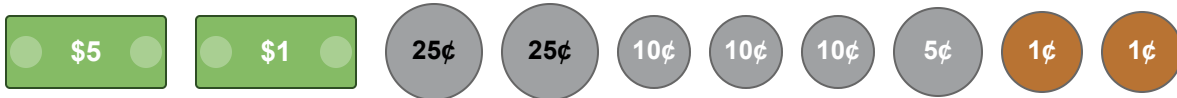
Grade 4

Name: _____

Count bills and coins. Write the total amount.

Example:      = \$6.55 or 6 dollars and 55 cents

(1) What is the total value of these bills and coins? _____



(2) What is the total value of these bills and coins? _____



(3) What is the total value of these bills and coins? _____



(4) What is the total value of these bills and coins? _____



(5) What is the total value of these bills and coins? _____



(6) What is the total value of these bills and coins? _____



(7) What is the total value of these bills and coins? _____



(8) What is the total value of these bills and coins? _____



(9) What is the total value of these bills and coins? _____



(10) What is the total value of these bills and coins? _____

