



# Area by Counting Squares

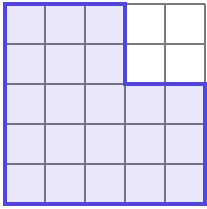
Grade 4

Name: \_\_\_\_\_

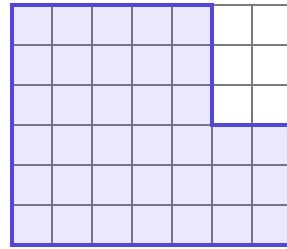
Find the area by counting the squares inside the shape.

Formula:  $A = \text{rows} \times \text{columns}$  (square units)

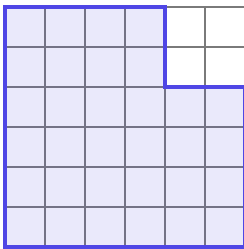
(1)



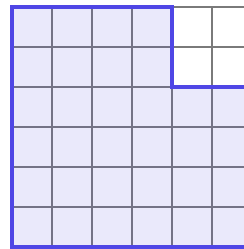
(2)



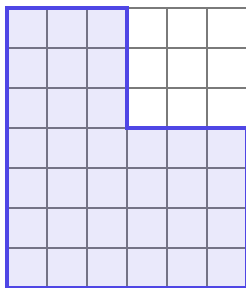
(3)



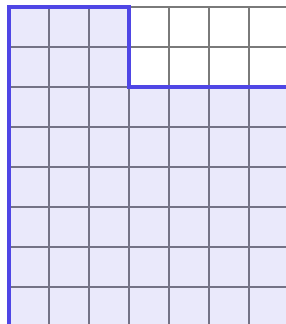
(4)



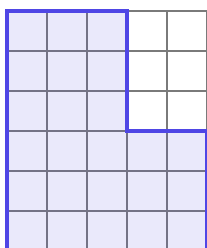
(5)



(6)



(7)



(8)

