



Area of Rectangles

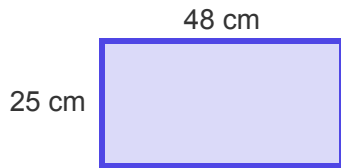
Grade 4

Name: _____

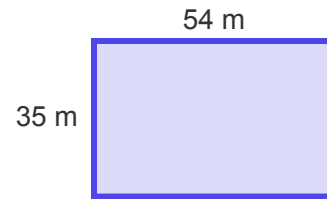
Find the area. Use the formula: length \times width.

Example: If a rectangle has a length of 6 cm and a width of 3 cm, its Area = Length \times Width = 6 cm \times 3 cm = 18 sq cm. Answer: 18 sq cm

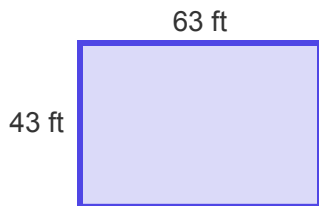
(1) Area = _____ sq cm



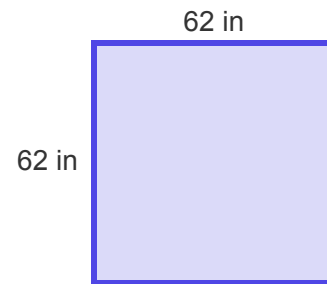
(2) Area = _____ sq m



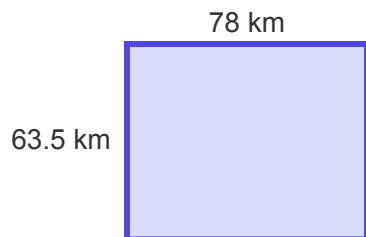
(3) Area = _____ sq ft



(4) Area = _____ sq in



(5) Area = _____ sq km



(6) Area = _____ sq yd

