



Area on a Grid

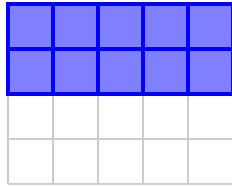
Grade 4

Name: _____

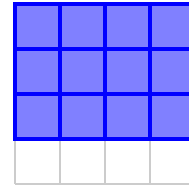
Count shaded squares to find the area. Each square is 1 square unit.

Example: To find the Area, count the number of square units inside the shape. Example: If a shape covers 4 squares, write: Area = 4 square units.


(1) Area = _____ sq units



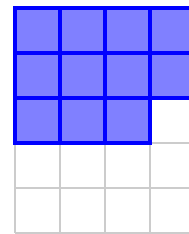
(2) Area = _____ sq units



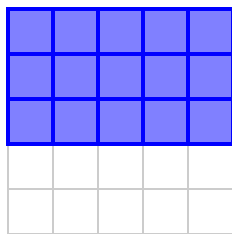
(3) Area = _____ sq units



(4) Area = _____ sq units



(5) Area = _____ sq units



(6) Area = _____ sq units

