



Area Word Problems: With Diagrams

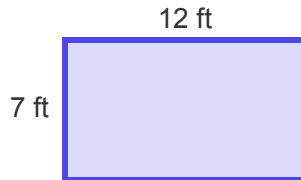
Grade 4

Name: _____

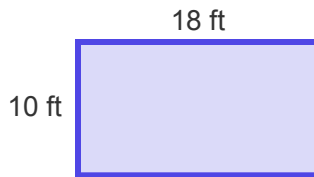
Read the story and find the area.

Tip: Area of a rectangle = length \times width.

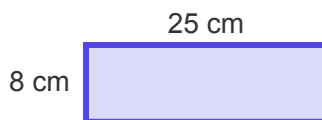
- (1) A garden plot is 12 feet long and 7 feet wide. What is its area? 🌱



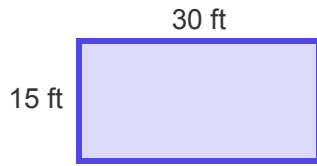
- (2) A classroom floor is 18 feet long and 10 feet wide. What is the area? 🏠



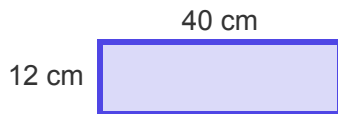
- (3) A poster is 25 centimeters long and 8 centimeters wide. What is its area? 🖼️



(4) A small field is 30 feet long and 15 feet wide. What is its area? 🌳



(5) A bulletin board is 40 centimeters long and 12 centimeters wide. What is its area? 📌



(6) A picnic blanket is 9 feet long and 6 feet wide. What is its area? 🧺

