



Classifying Quadrilaterals (Multiple Choice)

Grade 4

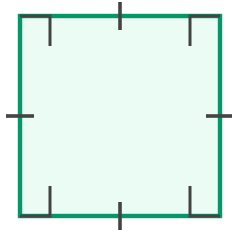
Name: _____

Choose the correct quadrilateral.

Square: 4 equal sides, 4 right angles. **Rectangle:** 4 right angles. **Parallelogram:** 2 pairs of parallel sides.

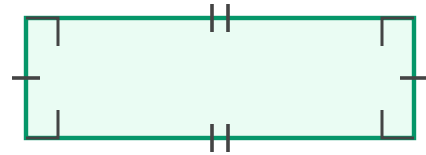
Rhombus: 4 equal sides. **Trapezoid:** 1 pair of parallel sides.

(1) Name the shape below.



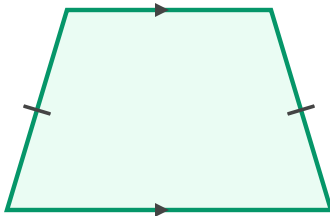
- (A) rectangle (B) rhombus (C) square
(D) trapezoid

(2) Identify this four-sided figure.



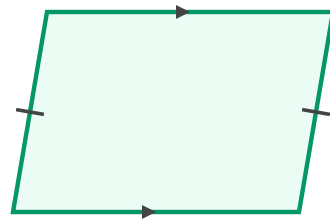
- (A) parallelogram (B) rectangle
(C) rhombus (D) trapezoid

(3) What type of quadrilateral is shown?



- (A) rectangle (B) rhombus (C) square
(D) trapezoid

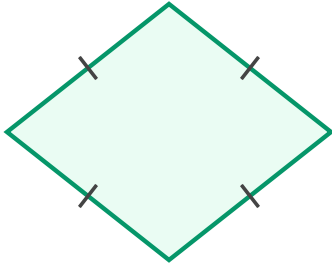
(4) Name the shape below.



- (A) parallelogram (B) rhombus
(C) square (D) trapezoid

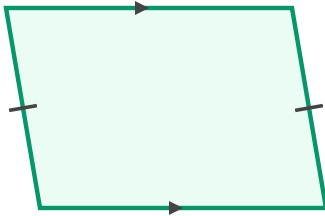


(5) What type of quadrilateral is shown?



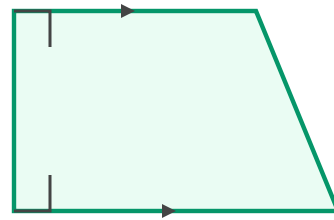
- (A) rectangle (B) rhombus (C) square
(D) trapezoid

(7) Identify this four-sided figure.



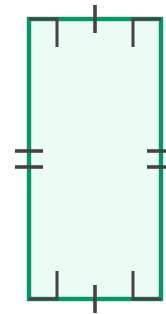
- (A) parallelogram (B) rectangle
(C) rhombus (D) square

(6) Identify this four-sided figure.



- (A) parallelogram (B) rectangle
(C) rhombus (D) trapezoid

(8) Name the shape below.



- (A) parallelogram (B) rectangle
(C) square (D) trapezoid

