



Classifying Quadrilaterals

Grade 4

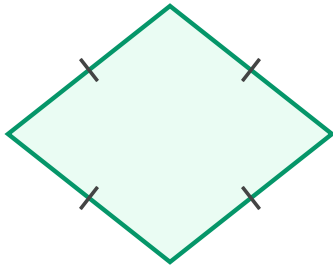
Name: _____

Identify the quadrilateral.

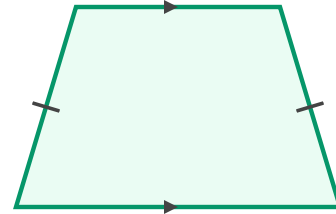
Square: 4 equal sides, 4 right angles. **Rectangle:** 4 right angles. **Parallelogram:** 2 pairs of parallel sides.

Rhombus: 4 equal sides. **Trapezoid:** 1 pair of parallel sides.

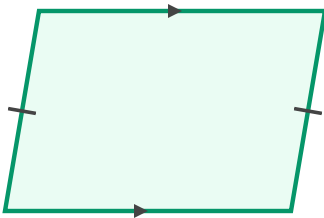
(1)



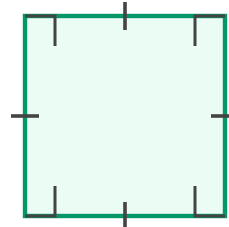
(2)



(3)

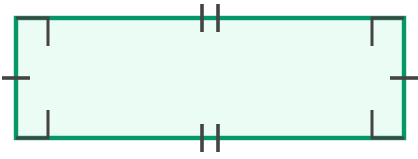


(4)

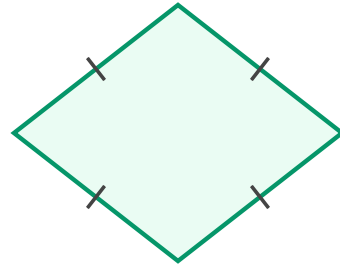




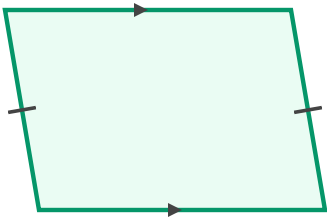
(5)



(6)



(7)



(8)

