



Classifying Triangles

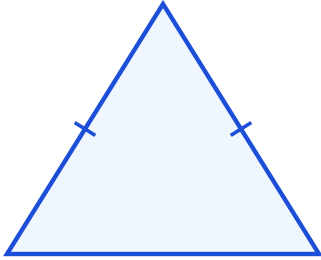
Grade 4

Name: _____

Classify each triangle.

Equilateral: 3 equal sides. Isosceles: 2 equal sides. Scalene: 0 equal sides. Right: 1 right angle. Acute: 3 acute angles. Obtuse: 1 obtuse angle.

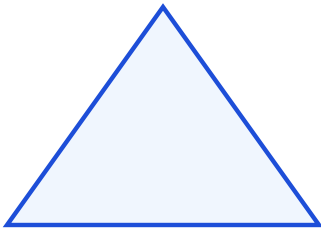
(1)



(2)



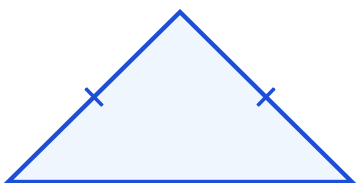
(3)



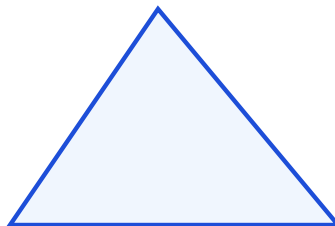
(4)



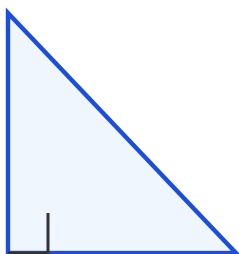
(5)



(6)



(7)



(8)

