



Measurement - Time: Convert Minutes and Hours

Grade 4


Name: _____

1 hour = 60 minutes


60 minutes = 1 hour

Example: 2 hr = 120 min


(1) What time will it be 1 and a half hours after 7:00? _____




(2) What time will it be 2 and three-quarter hours after 10:15? _____




(3) What time was it 1 hour and 20 minutes before 1:40? _____




(4) What time will it be 3 hours and 10 minutes after 5:50? _____




(5) What time was it 2 and a half hours before 11:05? _____




(6) What time will it be 4 and a quarter hours after 3:25? _____




(7) What time will it be 2 hours and 55 minutes after 8:00? _____




(8) What time was it 3 hours and 40 minutes before 12:00? _____




(9) What time will it be 1 hour and 50 minutes after 6:30? _____



(10) What time was it 4 hours and 5 minutes before 9:10? _____



(11) What time will it be 3 and a half hours after 2:00? _____



(12) What time was it 1 and a quarter hours before 4:45? _____

