



# Faces, Edges & Vertices

Grade 4

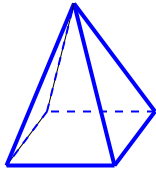
Name: \_\_\_\_\_

Count the faces, edges, and vertices.

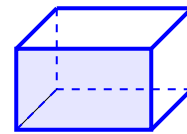
Faces: flat surfaces. Edges: where two faces meet. Vertices: corners where edges meet.

**Example:** A cube has 6 faces

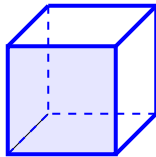
(1) How many vertices does this shape have? \_\_\_\_\_



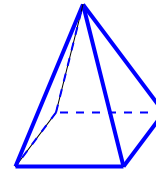
(2) How many faces does this shape have? \_\_\_\_\_



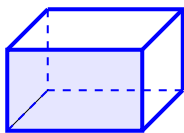
(3) How many edges does this shape have? \_\_\_\_\_



(4) Identify the shape's number of faces: \_\_\_\_\_



(5) Identify the shape's number of vertices: \_\_\_\_\_



(6) Identify the shape's number of edges: \_\_\_\_\_

