



# Which Fraction is Bigger?: Fraction Comparison

Grade 4

Name: \_\_\_\_\_

Identify the larger fraction.

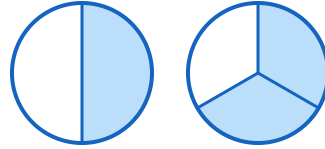
Example:  Which is bigger?  $\frac{3}{4}$

(1)



\_\_\_\_\_

(2)



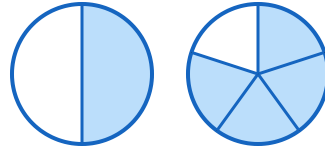
\_\_\_\_\_

(3)



\_\_\_\_\_

(4)



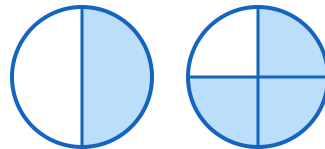
\_\_\_\_\_

(5)



\_\_\_\_\_

(6)



\_\_\_\_\_



(7)



---

(9)



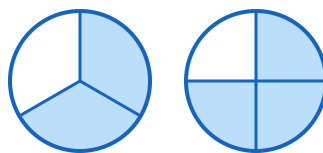
---

(11)



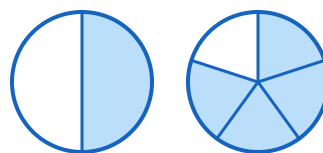
---

(8)



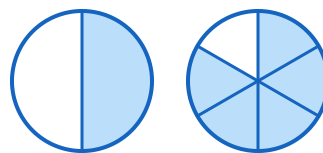
---

(10)



---

(12)



---

