

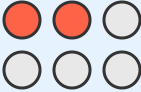


# Fractions of a Group

Grade 4

Name: \_\_\_\_\_

Write the fraction of shaded objects.

Example:  What fraction is shaded?  $\frac{2}{6}$

(1) What fraction of the circles are shaded?



\_\_\_\_\_

(2) What fraction of the squares are shaded?




\_\_\_\_\_

(3) What fraction of the stars are shaded?



\_\_\_\_\_

(4) What fraction of the circles are shaded?



\_\_\_\_\_

(5) What fraction of the squares are shaded?



\_\_\_\_\_


(6) What fraction of the stars are shaded?



\_\_\_\_\_



(7) What fraction of the circles are shaded?



(8) What fraction of the squares are shaded?

