

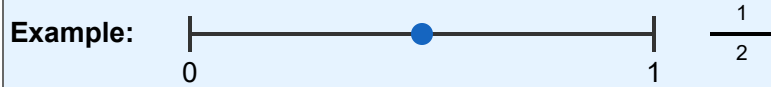


Visual Fractions: Fractions on a Number Line

Grade 4

Name: _____

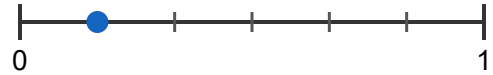
Write the fraction shown by the point on each number line.



(1)



(2)



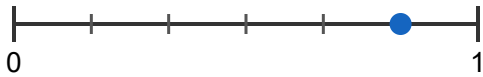
(3)



(4)



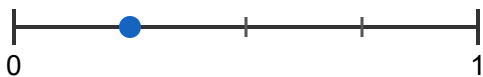
(5)



(6)



(7)



(8)



(9)



(10)

