



Identifying 3D Shapes

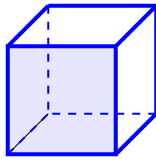
Grade 4

Name: _____

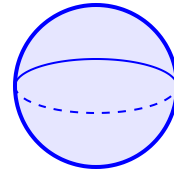
Name the three-dimensional shape.

Cube: 6 square faces. Sphere: round like a ball. Cylinder: like a can. Cone: like an ice cream cone. Rectangular Prism: like a box. Pyramid: square base, point at top.

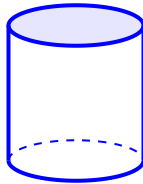
(1) Identify the shape:



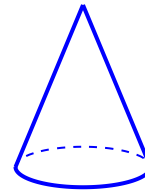
(2) What 3D shape is this?



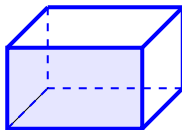
(3) Name the geometric solid:



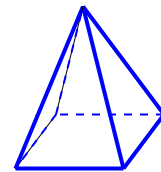
(4) Identify the shape shown:



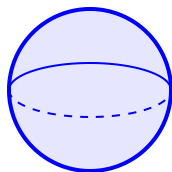
(5) This 3D figure is a



(6) What kind of pyramid is this?



(7) Name the shape with no flat faces:



(8) Identify the shape with two circular bases:

