




Identifying Shapes

Grade 4

Name: _____

Identify the shape. Choose the name.

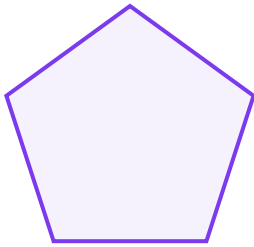
Count the sides and corners of each shape to help identify it. Remember: triangles have 3 sides, quadrilaterals have 4.



Example: What shape is this?

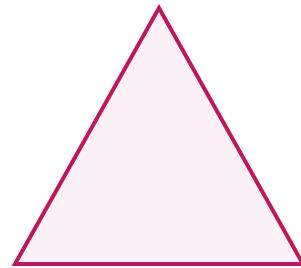
Answer: Square

(1)




- (A) pentagon (B) rectangle (C) square
(D) triangle

(2)



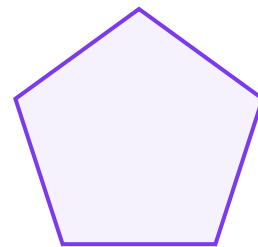
- (A) parallelogram (B) pentagon
(C) square (D) triangle

(3)



- (A) hexagon (B) oval (C) pentagon
(D) square

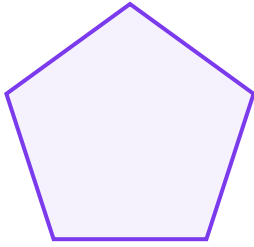
(4)



- (A) parallelogram (B) pentagon
(C) trapezoid (D) triangle



(5)



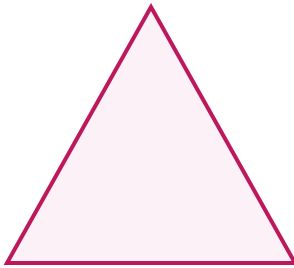
- (A) parallelogram (B) pentagon
(C) trapezoid (D) triangle

(6)



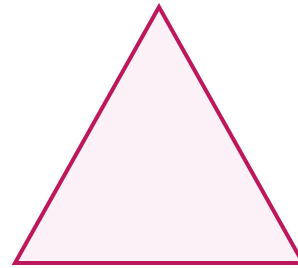
- (A) circle (B) pentagon (C) rectangle
(D) triangle

(7)



- (A) circle (B) rectangle (C) square
(D) triangle

(8)



- (A) diamond (B) parallelogram
(C) rectangle (D) triangle

