



Lines of Symmetry


Grade 4

Name: _____

How many lines of symmetry does each shape have?


A **line of symmetry** divides a shape into two mirror-image halves. A shape can have 0, 1, 2, or more lines of symmetry.

(1) How many lines of symmetry does this rhombus have?



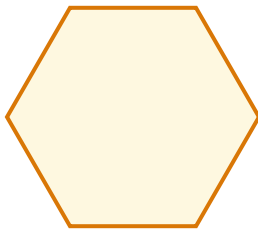
(A) 2 (B) 3 (C) 4 (D) infinite

(2) How many lines of symmetry does this circle have?



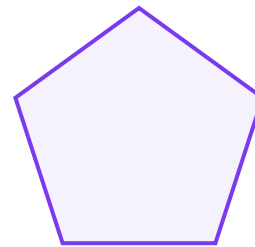
(A) 4 (B) 5 (C) 6 (D) infinite

(3) How many lines of symmetry does this regular hexagon have?



(A) 0 (B) 1 (C) 6 (D) infinite

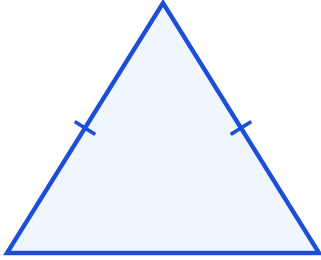
(4) How many lines of symmetry does this regular pentagon have?



(A) 1 (B) 2 (C) 5 (D) infinite



(5) How many lines of symmetry does this isosceles triangle have?



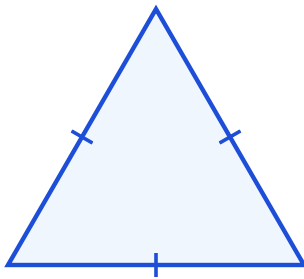
- (A) 1 (B) 4 (C) 5 (D) infinite

(6) How many lines of symmetry does this rectangle have?




- (A) 0 (B) 1 (C) 2 (D) 5

(7) How many lines of symmetry does this equilateral triangle have?



- (A) 0 (B) 2 (C) 3 (D) 6

(8) How many lines of symmetry does this square have?



- (A) 1 (B) 3 (C) 4 (D) 6

