



Measuring Angles

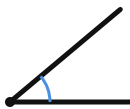
Grade 4

Name: _____

Use a protractor. Put the center on the vertex, line up one ray with 0° , then read where the other ray crosses.

Place the center of your protractor on the vertex. Align the 0 line with one ray. Read the measure of the other ray.

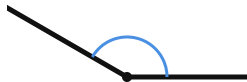
(1) Measure this angle in degrees.



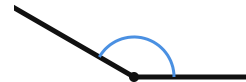
(2) What is the angle measure?



(3) Find how many degrees this angle measures.

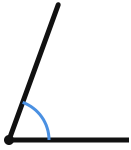


(4) Use a protractor to measure this angle.





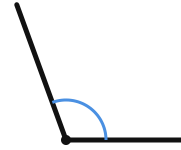
(5) Measure this angle in degrees.



(7) Find how many degrees this angle measures.



(6) What is the angle measure?



(8) Use a protractor to measure this angle.

