



Mixed Bills and Coins


Grade 4

Name: _____

Count bills and coins; organize by value, then total.

Example:    = \$2.29

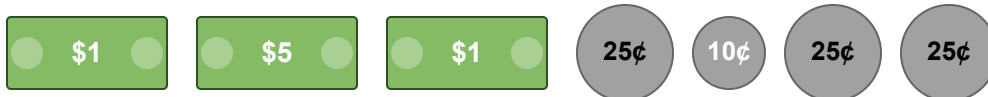
(1) What is the total amount of money? _____




(2) Count the money shown. _____



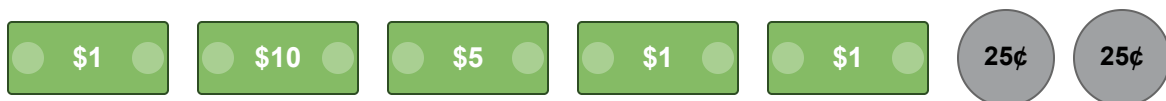
(3) How much money is this? _____



(4) What is the total value? _____




(5) Find the total amount. _____



(6) How much money do you have? _____



(7) Calculate the total money. _____



(8) What is the sum of this money? _____



(9) Calculate the total value of the money. _____



(10) How much money is shown below? _____

