



# Money Word Problems

Grade 4

Name: \_\_\_\_\_

Solve word problems with money amounts.

Add or subtract money amounts carefully. Don't forget the decimal point.

**Example:**  $\$20.00 - \$12.50 = \underline{\$7.50}$

- (1) Sarah bought a book for \$15.75 and a pen for \$3.25. How much did she spend in total? 📖



- (2) A baker sold a cake for \$24.50, a pie for \$12.75, and cookies for \$8.00. What was the total amount of money earned? 🍰

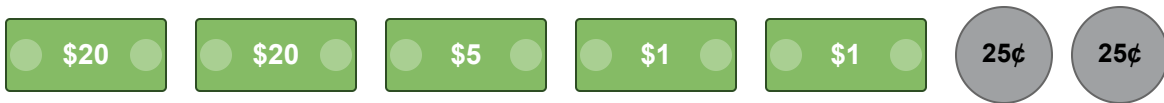


(3) John bought a toy car for \$18.75 and a sticker pack for \$4.25. He paid with a \$30 bill. How much change did he receive? 🚗



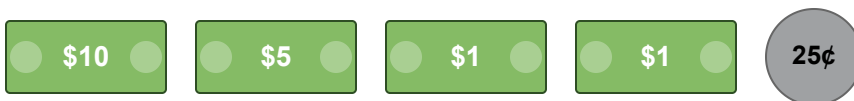
---

(4) A movie ticket costs \$9.50. How much would it cost for 5 friends to go to the movies? 🍿




---

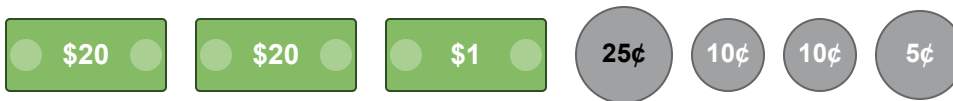
(5) Emily bought 3 bags of apples. Each bag cost \$4.25 and also contained a small toy that cost \$1.50. What was the total cost for all 3 bags? 🍏



- (6) A family bought groceries: milk for \$3.10, bread for \$2.85, and cheese for \$6.50. They paid with a \$20 bill. How much change did they get? 🛒



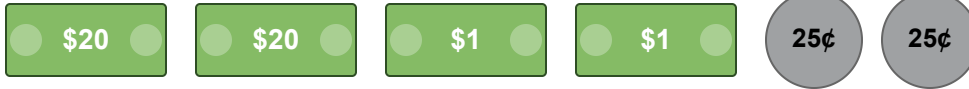
- (7) Mark has three \$10 bills, two \$5 bills, four quarters, and five dimes. How much money does he have in total? 💰



- (8) Store A sells a video game for \$39.99. Store B sells the same game for \$35.50, but you also need to buy a \$5.00 membership to get that price. Which store offers a better deal, and by how much? 🎮



(9) A pair of shoes costs \$55.00. During a sale, they are \$12.50 off. What is the sale price of the shoes? 🐟



---

(10) Lily saves \$7.25 each week from her allowance. How much money will she have saved after 6 weeks? 🐶

