



Division Word Problems: Multiplication and Division Word Problems (No Remainders)


Grade 4


Name: _____


Solve each word problem.


Read each problem carefully. Decide whether to multiply or divide, then write your answer.


Example: Example: There are 5 plates with 4 cookies on each plate. $5 \times 4 = 20$, so there are 20 cookies in all.

(1) A librarian arranged 3 shelves with 12 books on each shelf. How many books are there in total? _____ 

(2) Thirty tickets for a show were shared equally among 5 friends. How many tickets did each friend get? _____ 

(3) A gardener planted 8 rows of flowers with 3 flowers in each row. How many flowers did the gardener plant? _____ 

(4) A crafter has 36 inches of ribbon and uses 4 inches for each bow. How many bows can the crafter make? _____ 

(5) David bought 3 packs of pencils. Each pack has 9 pencils. How many pencils did David buy in all? _____ 



(6) There are 27 students in a class. The teacher wants to divide them into 3 equal groups. How many students will be in each group? _____ 🧑

(7) There are 3 soccer teams. Each team has 11 players. How many players are there in all? _____ ⚽

(8) Tom has 63 marbles and wants to share them equally among 7 friends. How many marbles will each friend get? _____ 🎱

