

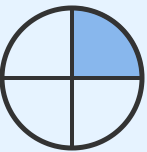


Understanding Fractions: Name That Fraction!

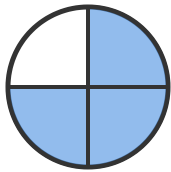
Grade 4

Name: _____


Write the fraction for the shaded parts.

Example:  = $\frac{1}{4}$

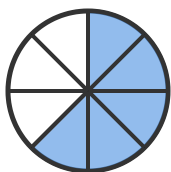
(1) What fraction of the circle is shaded?



(2) What fraction of the rectangle is shaded?



(3) What fraction of the circle is shaded?

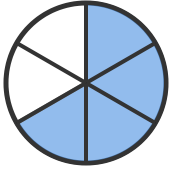


(4) What fraction of the rectangle is shaded?






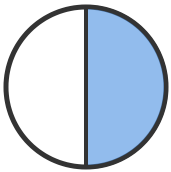
(5) What fraction of the circle is shaded?



(6) What fraction of the rectangle is shaded?



(7) What fraction of the circle is shaded?



(8) What fraction of the rectangle is shaded?

