



Radius & Diameter

Grade 4

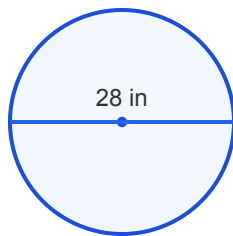
Name: _____

Find the missing length.

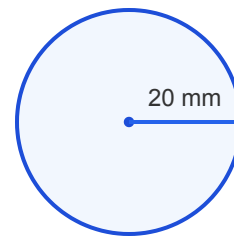
Diameter = $2 \times$ Radius. Radius = Diameter $\div 2$.

Example: Diameter = $2 \times 4 = 8$ cm

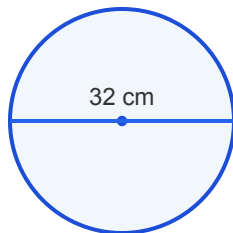
(1) The diameter is 28 in. What is the radius?



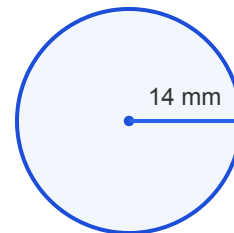
(2) The radius is 20 mm. What is the diameter?



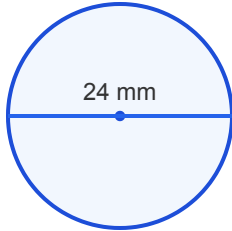
(3) The diameter is 32 cm. What is the radius?



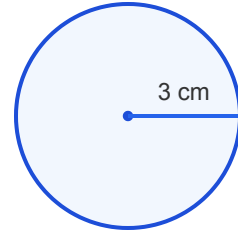
(4) The radius is 14 mm. What is the diameter?



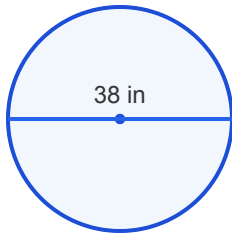
(5) The diameter is 24 mm. What is the radius?



(6) The radius is 3 cm. What is the diameter?



(7) The diameter is 38 in. What is the radius?



(8) The radius is 20 mm. What is the diameter?

