



Reading Line Graphs

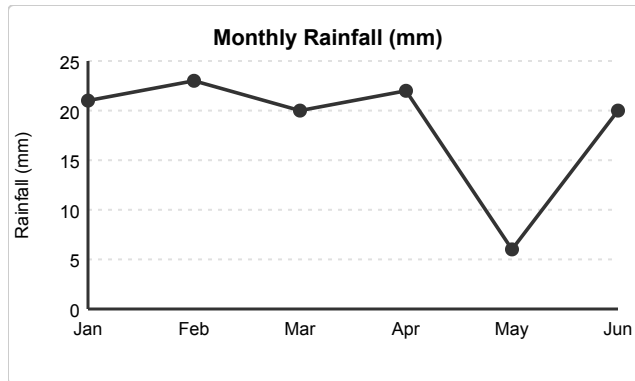
Grade 4

Name: _____

Answer questions using the line graph.

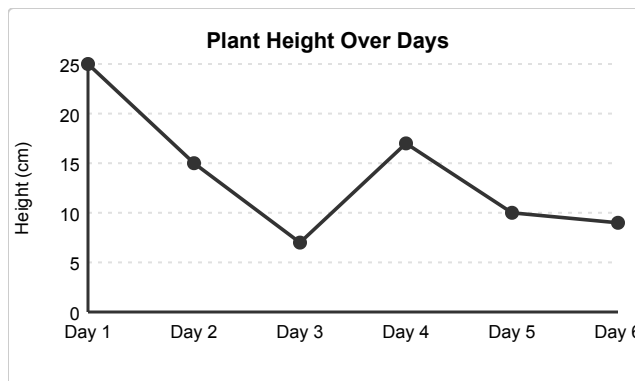
A line graph shows how something changes over time. Points are connected by lines to show the trend.

(1) What is the value at Jan?



- (A) 19 (B) 20 (C) 21 (D) 22

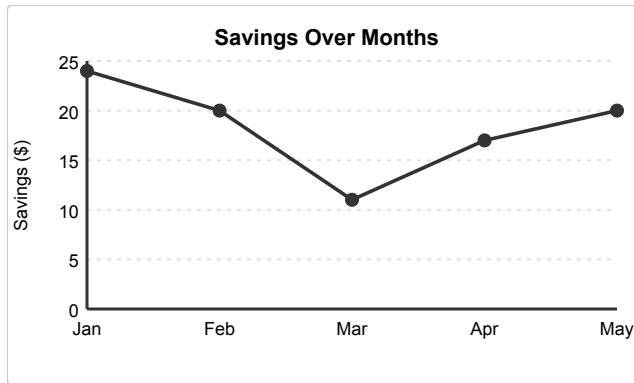
(2) What is the value at Day 4?



- (A) 15 (B) 16 (C) 17 (D) 18

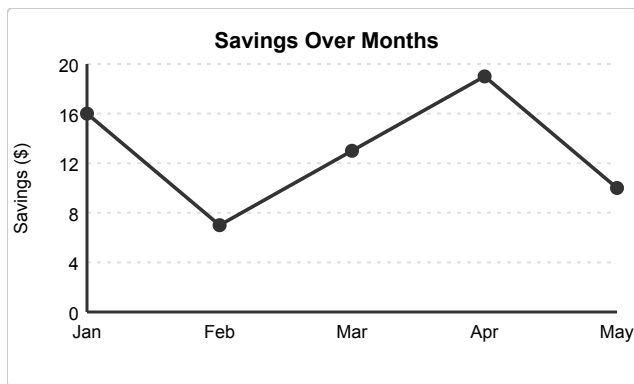


(3) What is the highest value shown on the graph?



- (A) 22 (B) 23 (C) 24 (D) 25

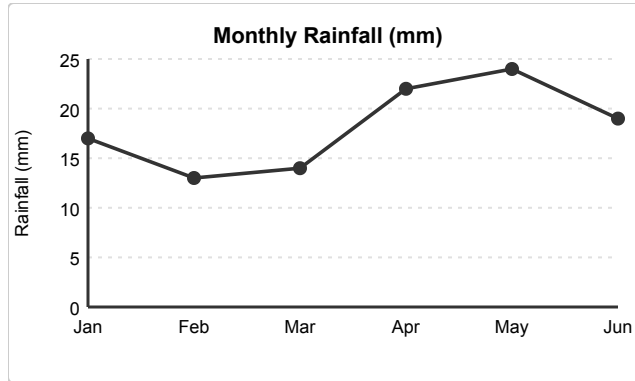
(4) What is the lowest value shown on the graph?



- (A) 5 (B) 6 (C) 7 (D) 8

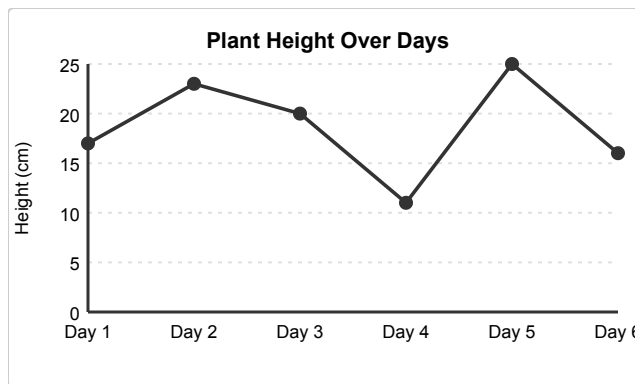


(5) What is the difference between the highest and lowest values?



- (A) 9 (B) 10 (C) 11 (D) 12

(6) How much did the value change from Day 1 to Day 2?



- (A) 4 (B) 5 (C) 6 (D) 7

