



Reading Rulers (Inches)

Grade 4

Name: _____

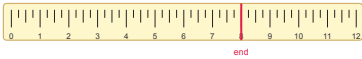
Determine the length shown on the ruler.

Look at where the object ends on the ruler. Count the marks to find the fraction.

Example: Length = $3\frac{1}{2}$ in

ruler-inches

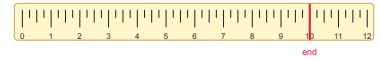
(1) What length is shown on the ruler?



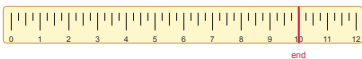
(2) What length is shown on the ruler?



(3) What length is shown on the ruler?



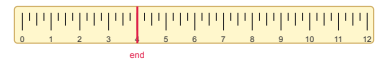
(4) What length is shown on the ruler?



(5) What length is shown on the ruler?



(6) What length is shown on the ruler?



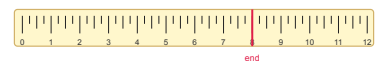
(7) What length is shown on the ruler?



(8) What length is shown on the ruler?



(9) What length is shown on the ruler?



(10) What length is shown on the ruler?

