



Division Word Problems: Single-Step Division Word Problems


Grade 4


Name: _____


Solve each division word problem.


Write a division equation and solve. Include the units in your answer (e.g., "8 baskets").


Example: Example: 24 apples shared equally into 6 bags: $24 \div 6 = 4$ apples in each bag.

(1) A teacher has 78 crayons to distribute equally among 6 art groups. How many crayons will each group receive? _____ 

(2) A librarian needs to arrange 91 new picture books equally onto 7 shelves. How many books will be on each shelf? _____ 

(3) Sarah baked 104 mini muffins and wants to share them equally among 8 friends. How many muffins will each friend get? _____ 

(4) There are 117 students at a sports camp who need to be split into 9 equal teams. How many students will be on each team? _____ 

(5) A factory produced 120 toy cars and needs to pack them equally into 10 boxes. How many cars will go into each box? _____ 



(6) A tour guide has 72 tourists and wants to form 6 equal groups for sightseeing. How many tourists will be in each group? _____ 🚶

(7) A generous donor wants to hand out \$84 equally to 7 local charities. How much money will each charity receive? _____ 💰

(8) Mark collected 96 rare stamps and wants to organize them equally into 8 stamp albums. How many stamps will be in each album? _____ 📄

