



Subtracting Money - Dollars and Cents


Grade 4

Name: _____

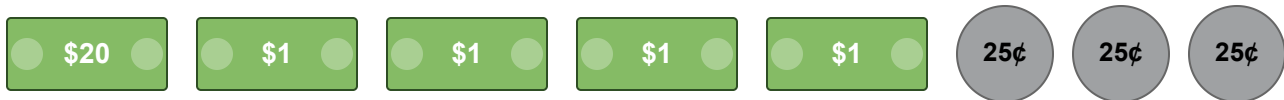
Subtract money. Line up decimals. Use dollars and cents.

Example: Subtract: \$15.75 - \$8.20. Answer: \$7.55


(1) Subtract the money: \$25.75 - \$10.25 = _____



(2) Find the difference: \$40.50 - \$15.75 = _____



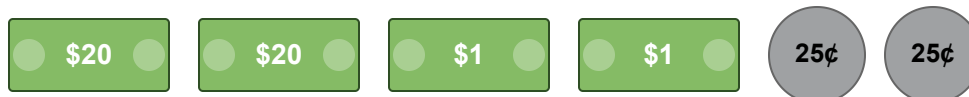
(3) Sarah had \$50.90. She spent \$20.40 on a book. How much money does she have left? _____



(4) A toy car costs \$18.25. If you pay with a \$20.00 bill, how much change will you get back? _____



(5) Calculate the remainder: \$75.00 - \$32.50 = _____



(6) What is the difference between \$90.25 and \$45.50? _____

\$20 \$20 \$1 \$1 \$1 \$1 25¢ 25¢ 25¢

