




Same Fractions, Different Looks: Twin Fractions

Grade 4

Name: _____

Compare models. Write YES or NO.

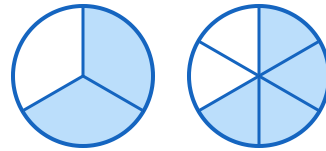
Compare the shaded parts in both shapes. If they show the same amount (like $\frac{1}{2}$ and $\frac{2}{4}$), write YES. If they show different amounts, write NO.

Example:  Are these the same fraction? YES (both show $\frac{1}{2}$)

(1)



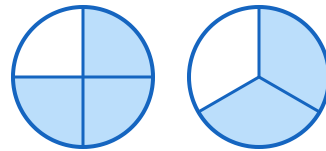
(2)



(3)



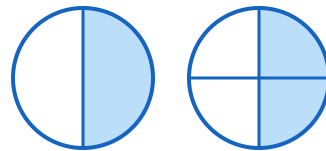
(4)



(5)



(6)

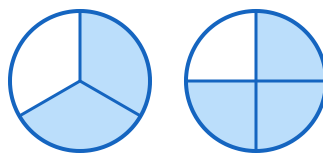




(7)



(8)



(9)



(10)

