



Classifying Quadrilaterals (Multiple Choice)

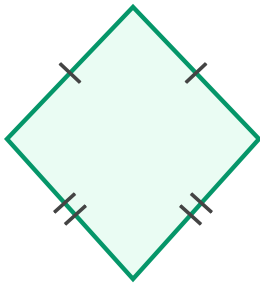
Grade 5

Name: _____

Choose the correct quadrilateral.

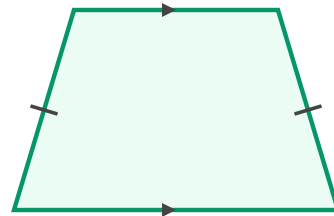
Square: 4 equal sides, 4 right angles. **Rectangle:** 4 right angles. **Parallelogram:** 2 pairs of parallel sides.
Rhombus: 4 equal sides. **Trapezoid:** 1 pair of parallel sides.

(1) What type of quadrilateral is shown?



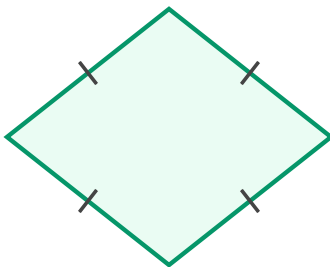
- (A) kite (B) parallelogram (C) rectangle
(D) square

(2) Classify this quadrilateral.



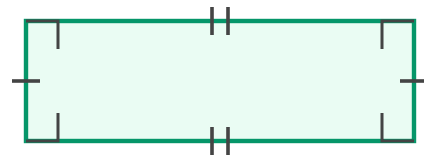
- (A) parallelogram (B) rectangle
(C) rhombus (D) trapezoid

(3) What type of quadrilateral is shown?



- (A) kite (B) parallelogram (C) rhombus
(D) square

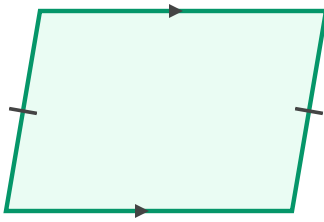
(4) Identify this four-sided figure.



- (A) kite (B) rectangle (C) square
(D) trapezoid



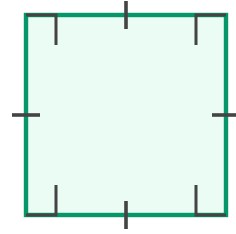
(5) What quadrilateral is shown?



(A) parallelogram (B) rectangle

(C) square (D) trapezoid

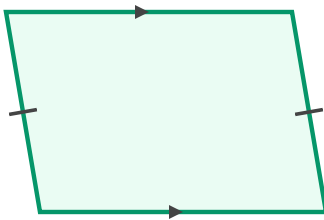
(6) What quadrilateral is shown?



(A) kite (B) rectangle (C) rhombus

(D) square

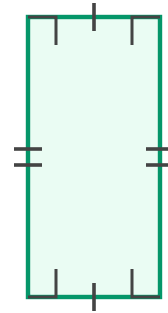
(7) What quadrilateral is shown?



(A) parallelogram (B) rectangle

(C) rhombus (D) square

(8) Name the shape below.



(A) parallelogram (B) rectangle

(C) square (D) trapezoid

