



Measurement - Time: Convert Seconds and Minutes

Grade 5


Name: _____

Convert between minutes and seconds.


60 seconds = 1 minute

Example: 2 min = 120 sec


(1) If a clock shows 4:00, what time will it show after 1.5 minutes?




(2) A clock shows 7:20. What time will it show after 90 seconds?




(3) What time will it be 3.25 minutes after 11:45? _____




(4) If the current time is 2:05, what will the time be in 150 seconds? _____




(5) A movie starts at 6:30. If the intro lasts for 0.75 minutes, what time will the movie content begin?




(6) A race started at 9:10. If the first runner finished in 210 seconds, what time did they finish?




(7) If it is 1:55 now, what time will it be in 4.5 minutes? _____




(8) A cake needs to bake for 330 seconds. If it goes into the oven at 10:00, what time should it come out? _____




(9) A short break lasts for 1.25 minutes. If it starts at 5:00, what time will it end? _____



(10) A task takes 270 seconds to complete. If you start at 8:40, what time will you finish? _____



(11) What time will it be 0.5 minutes after 12:15? _____



(12) A song is 450 seconds long. If it starts playing at 3:00, what time will it end? _____

