

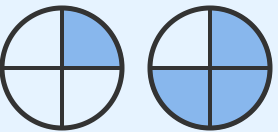


Which Fraction is Bigger?: Fraction Comparison

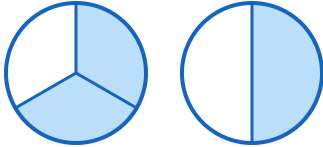
Grade 5

Name: _____

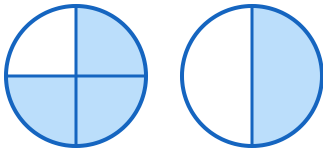
Identify the larger fraction.

Example:  Which is bigger? $\frac{3}{4}$

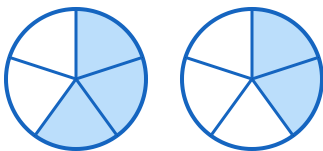
(1)



(3)



(5)



(2)



(4)

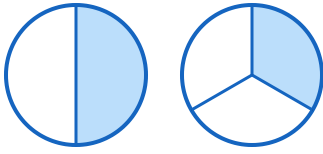


(6)

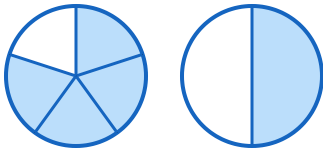




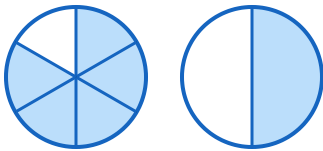
(7)



(9)



(11)



(8)



(10)



(12)



