



# Visual Fractions: Fractions on a Number Line

Grade 5

Name: \_\_\_\_\_

Write the fraction shown by the point on each number line.



(1)



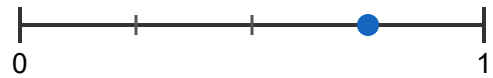
(2)



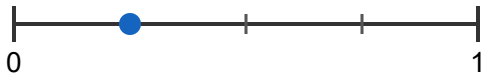
(3)



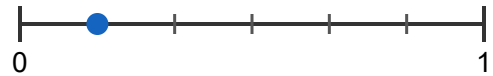
(4)



(5)



(6)



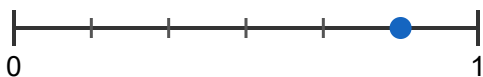
(7)



(8)



(9)



(10)

