



Visual Fractions: Identifying Fractions (Visual)

Grade 5

Name: _____

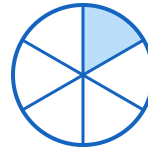
Write the fraction for the shaded area.

Example: Circle with $\frac{1}{2}$ shaded = $\frac{1}{2}$

(1)




(2)



(3)



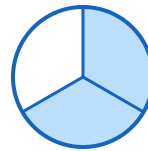
(4)



(5)




(6)



(7)



(8)






(9)



(10)



(11)



(12)

