



Identifying Shapes

Grade 5

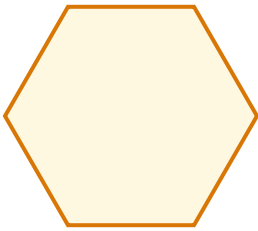
Name: _____

Identify and color each shape by its properties.


Use the angles and side lengths to identify the exact type. Triangles and quadrilaterals each have many varieties — look closely.

Example: Which shape has four equal sides and four right angles? Answer: Square


(1)




(2)



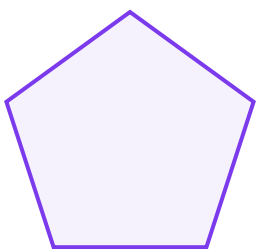
(3)




(4)



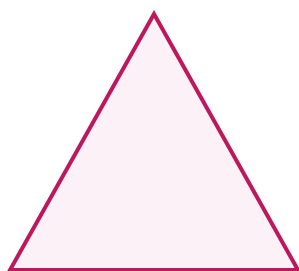
(5)



(6)



(7)



(8)

