



# Irregular Area on Grids

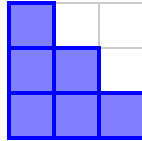
Grade 5

Name: \_\_\_\_\_

Count or multiply sections for area in square meters.

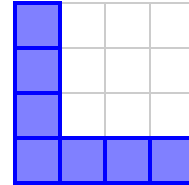
**Example:** Example: Count 10 shaded squares, so the area is 10 sq m.

(1) What is the area of the shaded shape?



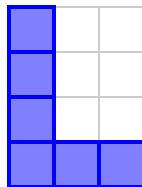
- (A) 3 square units    (B) 4 square units  
(C) 6 square units    (D) 8 square units

(2) Find the area of this L-shaped shape.




- (A) 4 square units    (B) 5 square units  
(C) 7 square units    (D) 9 square units

(3) What is the area of the shaded shape?



- (A) 3 square units    (B) 4 square units  
(C) 6 square units    (D) 8 square units

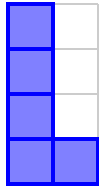
(4) Find the area of this L-shaped shape.



- (A) 2 square units    (B) 3 square units  
(C) 5 square units    (D) 7 square units

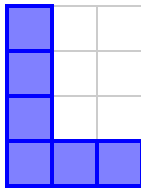


(5) What is the area of the shaded shape?



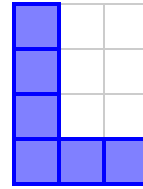
- (A) 2 square units    (B) 3 square units  
(C) 5 square units    (D) 7 square units

(7) What is the area of the shaded shape?



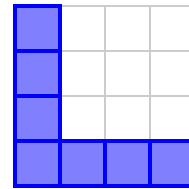
- (A) 3 square units    (B) 4 square units  
(C) 6 square units    (D) 8 square units

(6) Find the area of this L-shaped shape.



- (A) 3 square units    (B) 4 square units  
(C) 6 square units    (D) 8 square units

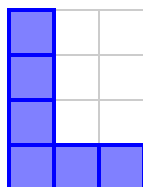
(8) Find the area of this L-shaped shape.



- (A) 4 square units    (B) 5 square units  
(C) 7 square units    (D) 9 square units




(9) What is the area of the shaded shape?



- (A) 3 square units    (B) 4 square units  
(C) 6 square units    (D) 8 square units

(10) Find the area of this L-shaped shape.



- (A) 3 square units    (B) 4 square units  
(C) 6 square units    (D) 8 square units

