



Line Plots with Fractional Data

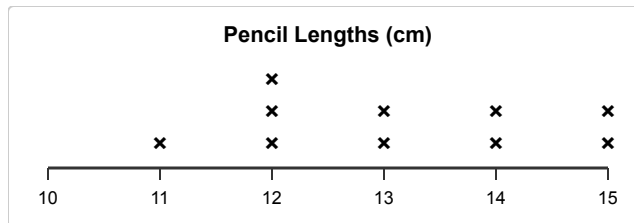
Grade 5

Name: _____

Answer questions using the line plot.

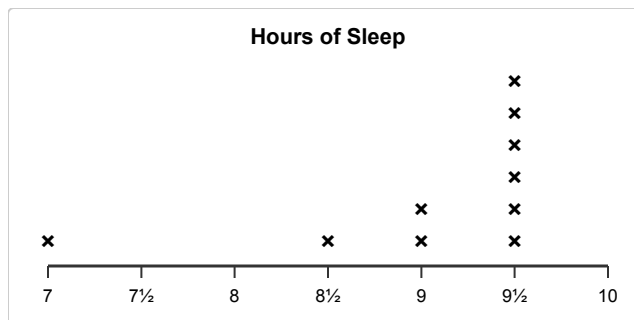
A line plot shows data on a number line. Each 'X' represents one item.

(1) How many measurements are exactly 13 cm?



- (A) 0 (B) 1 (C) 2 (D) 3

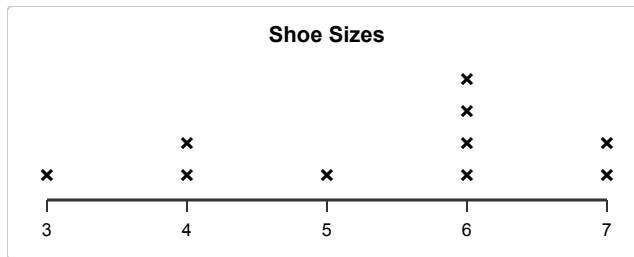
(2) What is the most common value (mode)?



- (A) 17 (B) 18 (C) 19 (D) 20

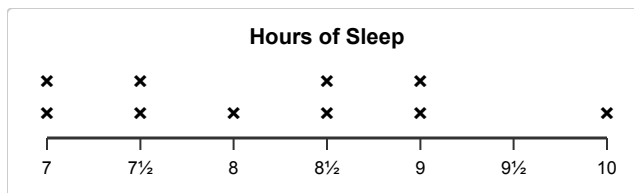


(3) How many measurements are shown in total?



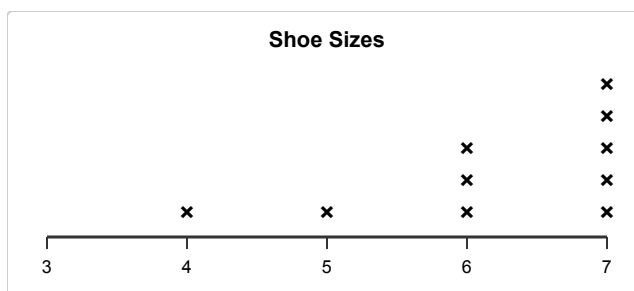
- (A) 8 (B) 9 (C) 10 (D) 11

(4) How many measurements are more than 8 hours?



- (A) 3 (B) 4 (C) 5 (D) 6

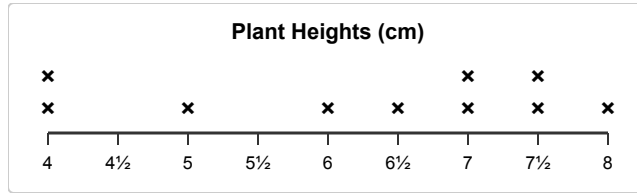
(5) How many measurements are 6 or less?



- (A) 3 (B) 4 (C) 5 (D) 6



(6) What is the range of the data?



- (A) 6 (B) 7 (C) 8 (D) 9

