



Line Relationships

Grade 5

Name: _____

Identify the line relationship.

Parallel: lines that never meet. Perpendicular: lines that meet at a right angle (90°). Intersecting: lines that cross each other.

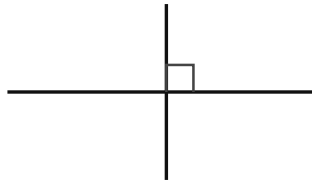
Example: These lines are Parallel

(1)



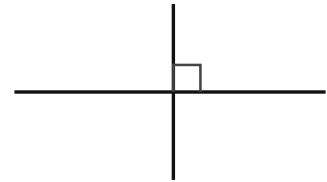
- (A) intersecting
- (B) parallel
- (C) perpendicular

(2)



- (A) intersecting
- (B) parallel
- (C) perpendicular

(3)



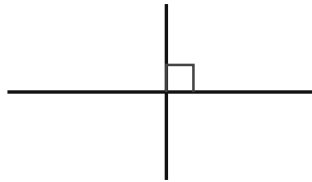
- (A) intersecting
- (B) parallel
- (C) perpendicular

(4)



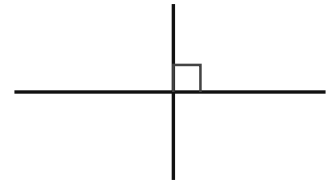
- (A) intersecting
- (B) parallel
- (C) perpendicular

(5)



- (A) intersecting
- (B) parallel
- (C) perpendicular

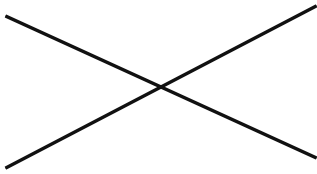
(6)



- (A) intersecting
- (B) parallel
- (C) perpendicular



(7)



- (A) intersecting
- (B) parallel
- (C) perpendicular

(8)



- (A) intersecting
- (B) parallel
- (C) perpendicular

