



Measuring Angles

Grade 5

Name: _____

Use a protractor: center on the vertex, align one ray with 0°, read where the other ray crosses.

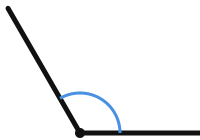
(1)



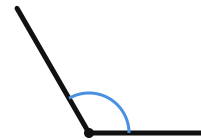
(2)



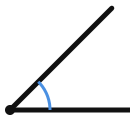
(3)



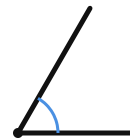
(4)



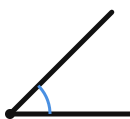
(5)



(6)



(7)



(8)



