



# Money Word Problems

Grade 5

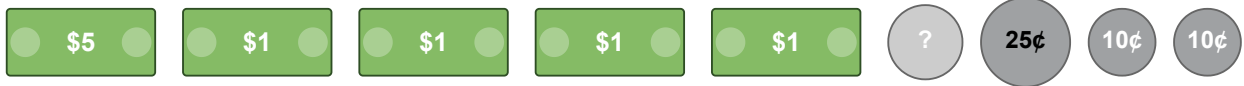
Name: \_\_\_\_\_

Solve word problems with money amounts.

Add or subtract money amounts carefully. Don't forget the decimal point.

**Example:**  $\$20.00 - \$12.50 = \underline{\$7.50}$

- (1) Sarah bought a book for \$8.75 and a bookmark for \$1.20. What was her total cost? 📖




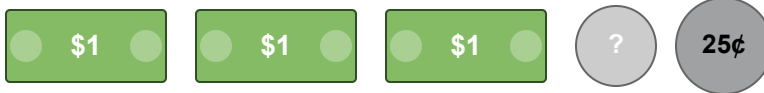
- (2) A baker bought flour for \$5.50, sugar for \$3.25, and butter for \$4.00. How much did she spend in total? 👨‍🍳




- (3) John purchased a toy car for \$6.80 and a small ball for \$2.15. He paid with a \$10 bill. How much change did he receive? 🚗




(4) Emily bought 3 pencils at \$0.75 each and a ruler for \$1.50. What was her total spending? 




---

(5) A fruit stand sells apples for \$1.25 each. If you buy 5 apples, what is the total cost? 



---

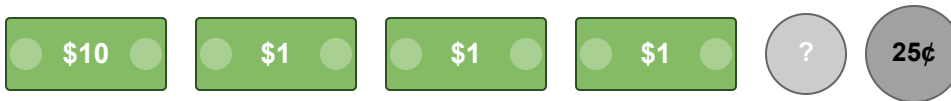
(6) Michael has two \$5 bills, three \$1 bills, two quarters, and five dimes. How much money does he have in total? 




(7) Lisa saved \$4.50 in week one, \$6.75 in week two, and \$3.00 in week three. How much did she save altogether? 🐷



(8) A movie ticket costs \$9.50 and a popcorn costs \$4.25. What is the total cost for one person to enjoy both? 🍿



(9) A lemonade stand sold 8 cups of lemonade at \$1.50 per cup. How much money did they earn in total? 🍋



(10) For a school trip, each student needs to pay \$7.50 for admission and \$3.00 for lunch. What is the total cost for one student? 🚌

