



# Perimeter of Rectangles

Grade 5

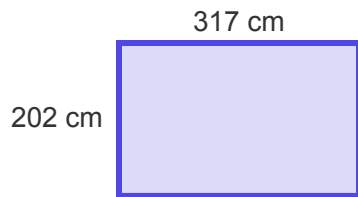
Name: \_\_\_\_\_

Calculate the perimeter.

Add all the sides together to find the perimeter.

**Example:** Perimeter (P) = side + side + side + side

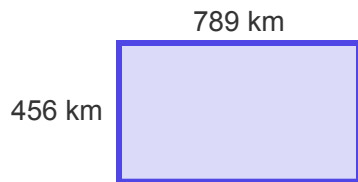
(1) Perimeter = \_\_\_\_\_ cm



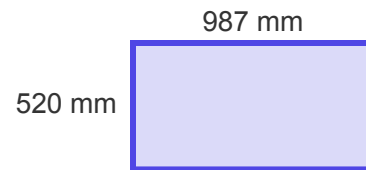
(2) Perimeter = \_\_\_\_\_ m



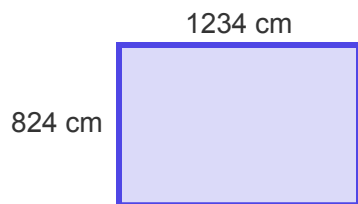
(3) Perimeter = \_\_\_\_\_ km



(4) Perimeter = \_\_\_\_\_ mm



(5) Perimeter = \_\_\_\_\_ cm



(6) Perimeter = \_\_\_\_\_ m

