



Points, Lines, Rays & Segments

Grade 5

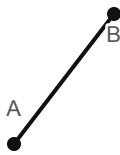
Name: _____

Identify the figure.

Point: exact location. Line: straight path endless in both directions. Ray: endless in one direction. Segment: part of a line with two endpoints.

Example: This is a Line

(1) How many endpoints does this figure have?



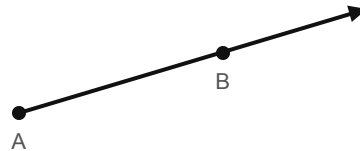
(3) What geometric figure is shown?



(2) What geometric figure is shown?



(4) What geometric figure is shown?

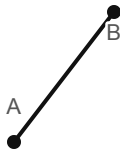




(5) How many endpoints does this figure have?



(7) How many endpoints does this figure have?



(6) What geometric figure is shown?



(8) How many endpoints does this figure have?

