



# Reading Line Graphs

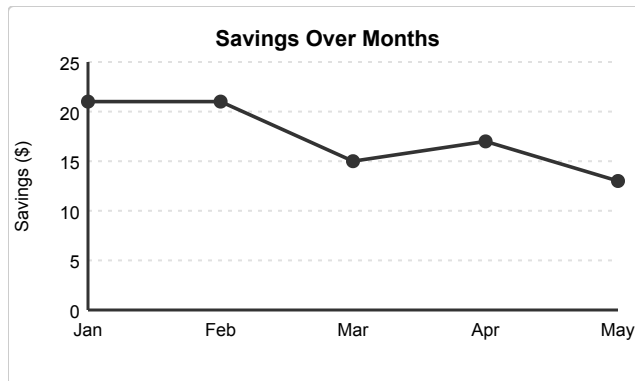
Grade 5

Name: \_\_\_\_\_

Answer questions using the line graph.

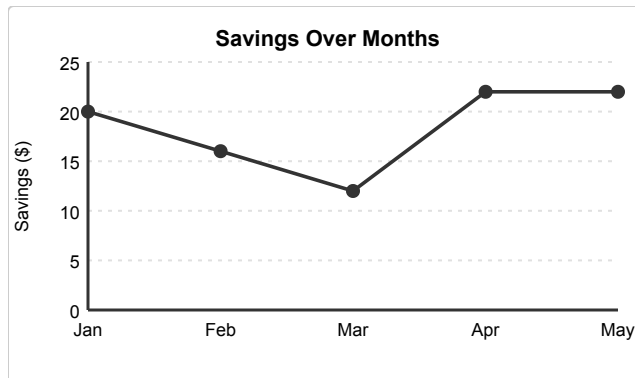
A line graph shows how something changes over time. Points are connected by lines to show the trend.

(1) What is the value at Jan?



- (A) 19 (B) 20 (C) 21 (D) 22

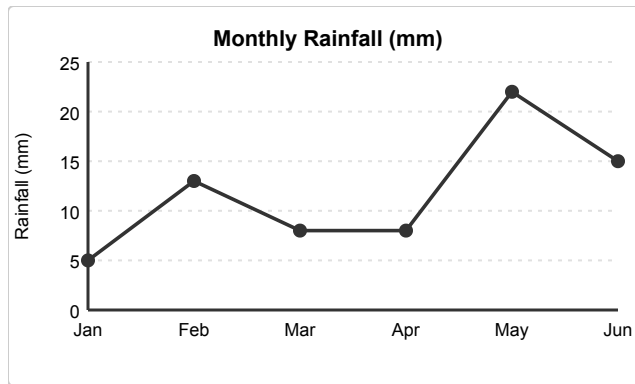
(2) What is the value at Mar?



- (A) 10 (B) 11 (C) 12 (D) 13

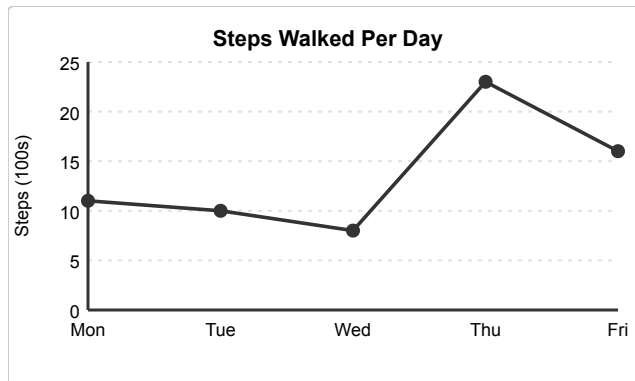


(3) What is the highest value shown on the graph?



- (A) 20 (B) 21 (C) 22 (D) 23

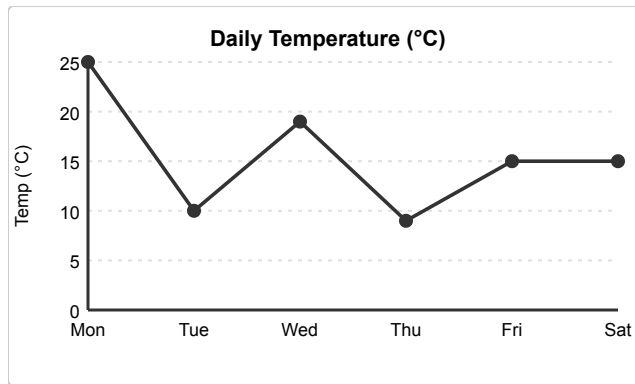
(4) What is the lowest value shown on the graph?



- (A) 6 (B) 7 (C) 8 (D) 9

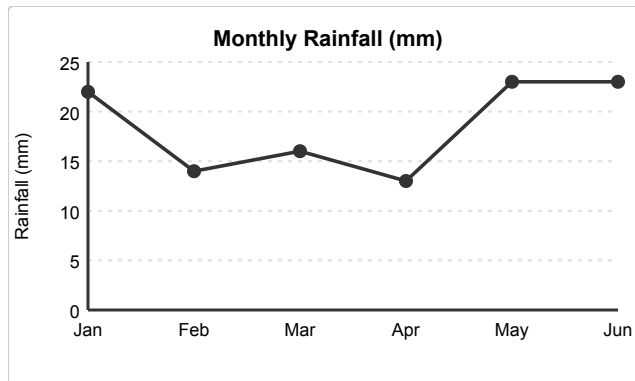


(5) What is the difference between the highest and lowest values?



- (A) 14 (B) 15 (C) 16 (D) 17

(6) How much did the value change from Jan to Feb?



- (A) 6 (B) 7 (C) 8 (D) 9

