



Reading Thermometers

Grade 5

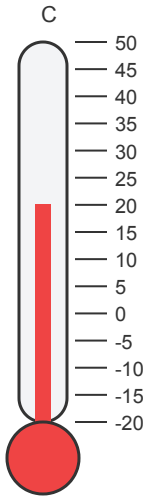
Name: _____

What temperature is shown?

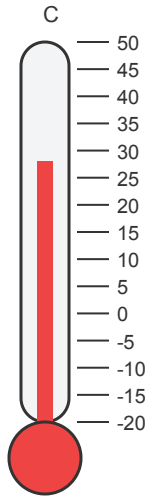
Look at the level of the red liquid. Pay attention to the scale (counting by 1s, 2s, or 5s).

Example: Temp = 72 °F

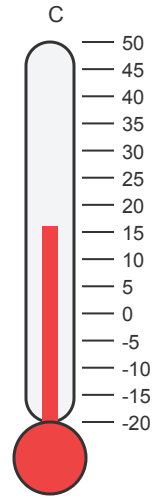
(1)



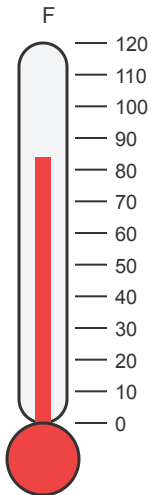
(2)



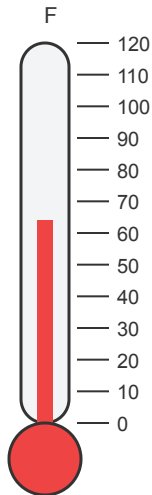
(3)



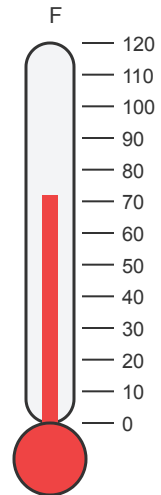
(4)



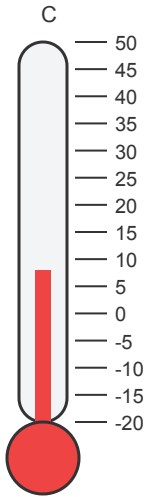
(5)



(6)



(7)



(8)

