



# Reading Volume

Grade 5


Name: \_\_\_\_\_

Read each cylinder and write the volume.

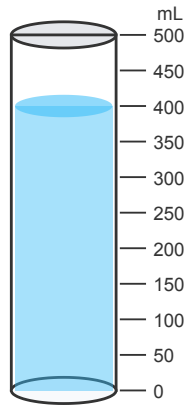
Read the measurement at the bottom of the meniscus (the curve of the liquid).

**Example:** Volume = 50 mL


(1)



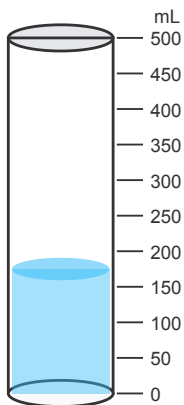
(2)




(3)




(4)




(5)



(6)




(7)



---

(8)



---

