




Receipts & Mini-Budgets (Money Addition) - Set A


Grade 5


Name: _____



Add item costs; compute remaining or needed funds.


Example: $12.50+7.25+3.75=23.50$


- (1) Sarah bought a storybook for \$3.75 and a fancy pen for \$1.25. How much did she spend in total? Answer: _____ 




- (2) At the market, Tom bought an apple for \$0.80, a banana for \$0.65, and an orange for \$0.55. What was his total cost? Answer: _____ 




- (3) Liam bought a toy car for \$5.50 and a small ball for \$2.75. He paid with a \$10.00 bill. How much change did he receive? Answer: _____ 



(4) Mia bought 2 delicious muffins for \$1.50 each and a juice box for \$2.25. What was her total bill? Answer: _____ 🧁




(5) David bought a sandwich for \$4.25 and a drink for \$1.75. What was the total cost of his lunch? Answer: _____ 🥪




(6) Lily bought a magazine for \$3.99 and a candy bar for \$1.25. She paid with \$5.50. How much change did she get? Answer: _____ 📄




(7) For her art project, Chloe bought crayons for \$2.10, paper for \$3.50, and glue for \$1.40. What was her total expense? Answer: _____ 





(8) Emily bought 3 stamps for \$0.60 each and an envelope for \$0.75. She paid with a \$5.00 bill. How much change did she receive? Answer: _____ 





(9) Mark ordered a coffee for \$2.85 and a pastry for \$1.65. What was his total for breakfast? Answer: _____ 



(10) For groceries, Anna bought milk for \$3.20, bread for \$2.50, eggs for \$1.80, and butter for \$1.50. What was her total grocery bill? Answer: _____ 



(11) Daniel bought a T-shirt for \$12.50 and a pair of socks for \$4.75. He paid with a \$20.00 bill. How much change did he get back? Answer: _____ 



(12) At the stationery store, Ben bought 4 pencils for \$0.75 each and an eraser for \$0.50. What was his total purchase? Answer: _____ 