



# Perimeter of Rectangles

Grade 6


Name: \_\_\_\_\_

Find the perimeter.


Perimeter is the distance around the outside of a shape. Add all side lengths together:  $P = 2 \times (\text{length} + \text{width})$ .

**Example:** Perimeter =  $2 \times (5 + 3) = \underline{16 \text{ cm}}$

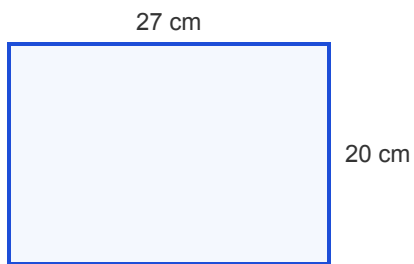
(1)



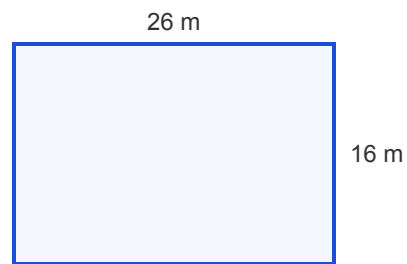
(2)



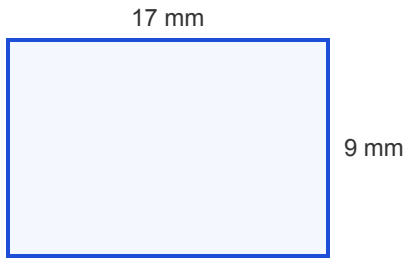
(3)



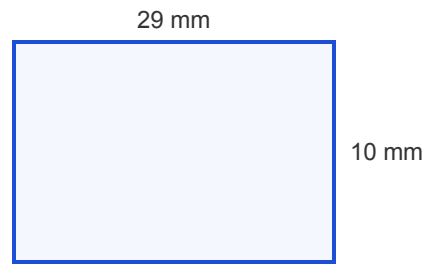
(4)



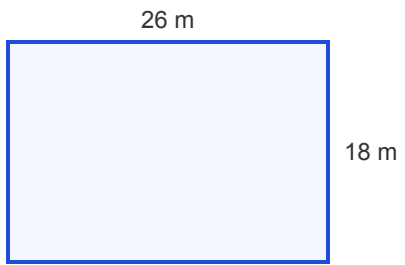
(5)



(6)



(7)



(8)

