



Points, Lines, Rays & Segments (Multiple Choice)

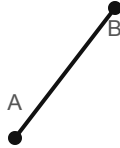
Grade 6

Name: _____

Select the figure that matches the description.

Point: exact location. **Line:** straight path endless in both directions. **Ray:** endless in one direction. **Segment:** part of a line with two endpoints.

(1) What geometric figure is shown?



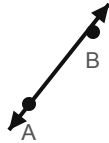
- (A) line (B) line segment (C) point
(D) ray

(2) How many endpoints does this figure have?



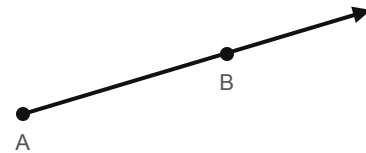
- (A) 0 (B) 1 (C) 2 (D) 3

(3) How many endpoints does this figure have?



- (A) 0 (B) 1 (C) 2 (D) 3

(4) What geometric figure is shown?



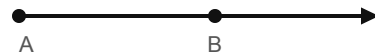
- (A) line (B) line segment (C) point
(D) ray

(5) What geometric figure is shown?



- (A) line (B) line segment (C) point
(D) ray

(6) What geometric figure is shown?



- (A) line (B) line segment (C) point
(D) ray



(7) How many endpoints does this figure have?



- (A) 0 (B) 1 (C) 2 (D) 3

(8) What geometric figure is shown?



- (A) line (B) line segment (C) point
(D) ray

