



Radius & Diameter

Grade 6

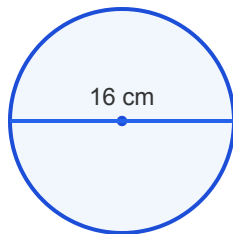
Name: _____

Find the missing length.

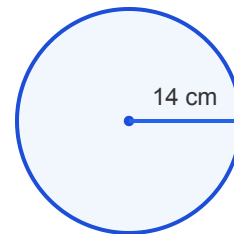
Diameter = $2 \times$ Radius. Radius = Diameter \div 2.

Example: Diameter = $2 \times 4 = 8$ cm

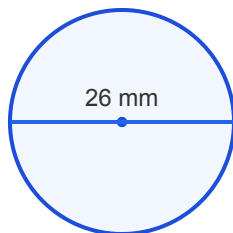
(1) The diameter is 16 cm. What is the radius?



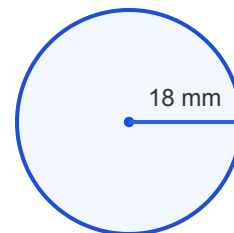
(2) The radius is 14 cm. What is the diameter?



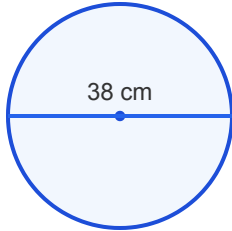
(3) The diameter is 26 mm. What is the radius?



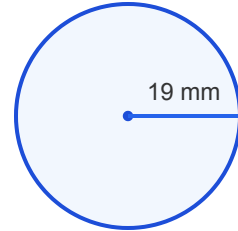
(4) The radius is 18 mm. What is the diameter?



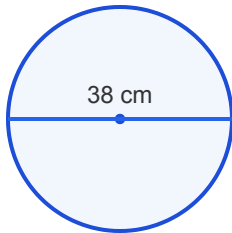
(5) The diameter is 38 cm. What is the radius?



(6) The radius is 19 mm. What is the diameter?



(7) The diameter is 38 cm. What is the radius?



(8) The radius is 11 in. What is the diameter?

